



INDIAN SCHOOL DARSAIT
 MATHEMATICS
 SHAPES AND PATTERNS
 PRACTICE WORKSHEET



Class: II Sec:

Date:.....

Name:.....

Roll No:.....

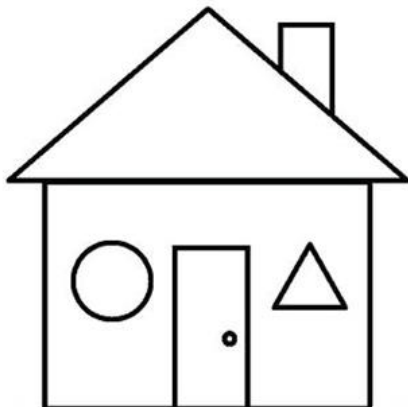
I. Who am I ?

- a) I have 4 equal sides and 4 corners. _____
- b) I have a curved face, I can roll but not slide. _____
- c) I have 4 sides. My opposite sides are equal. _____
- d) I am a solid shape which represents a match box. _____
- e) I have 2 flat faces and 1 curved face. _____
- f) I am a solid shape which represents a Christmas tree. _____

II. Match the following:

- | | |
|---------------------|---------------------------------|
| a) Has 6 flat faces | (i) Circle |
| b) Planet Earth | (ii) 1 flat face, 1 curved face |
| c) Birthday cap | (iii) Triangle |
| d) Wheel | (iv) Sphere |
| e) 3 corners | (v) Cube |

III. Count number of sleeping, standing, slanting and curved lines :



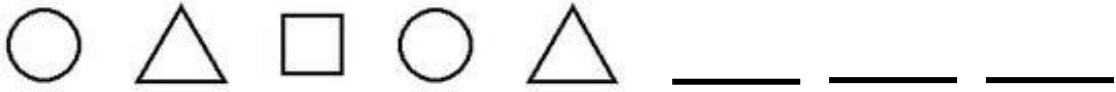
Sleeping Lines : _____

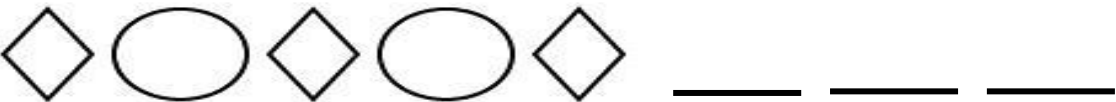
Standing Lines : _____

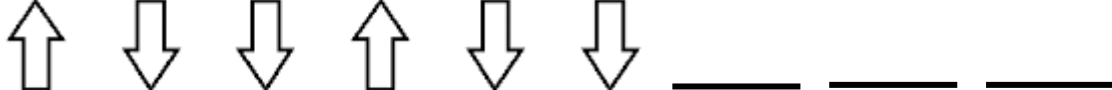
Slanting Lines : _____

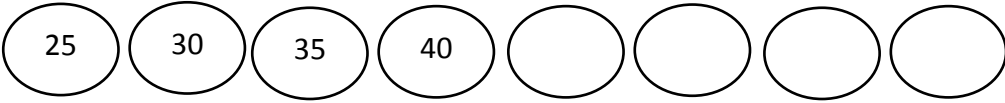
Curved Lines : _____

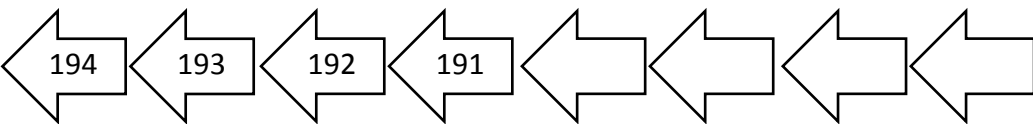
IV. Complete the pattern :


a. 

b. 


c. 

d. 

e. 

f. 

V. Colour and count the different shapes in the picture :



a) Circle	Yellow	
b) Square	Blue	
c) Triangle	Red	
d) Rectangle	Green	