



Class: I Sec:

Date: 22.01.2019

Name:

Max.marks:10

Time: 30 minutes

Roll No:.....

I. Choose the correct answer.

(6 x ½ = 3)

i. The symbol of Indian rupee is _____.

- a. Rs. b. p c. R d. ₹

ii. $18 - 7 =$ _____

- a. 9 b. 10 c. 11 d. 6

iii. The sign of subtraction is _____.

- a. + b. = c. - d. x

iv. ₹ 10 + ₹ 5 = _____

- a. ₹ 10 b. ₹ 15 c. ₹ 5 d. ₹ 1

v. $11 - 4 =$ _____

- a. 7 b. 6 c. 4 d. 8

vi. Twenty rupees is written as _____.

- a. 20 ₹ b. ₹ 20 c. 20 rupees d. Rs.20

Q II. Write the value of the following .

(1 x ½=1)





QIII. Subtract

(2x1=2)

a.

	T	O
	1	9
-		6


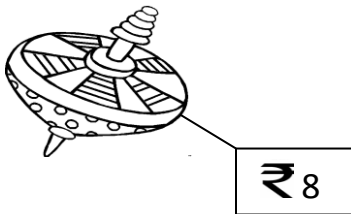
b.

	T	O
	1	4
-		4

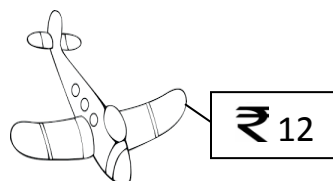
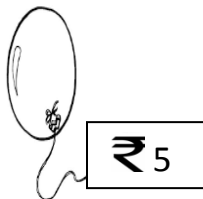
Q IV. Find the total amount.

(2x 1 = 2)

a.

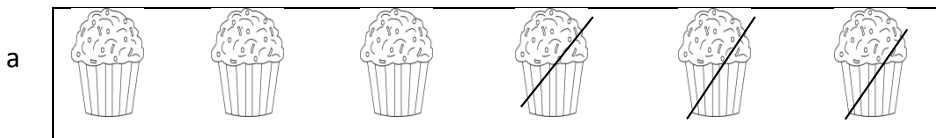


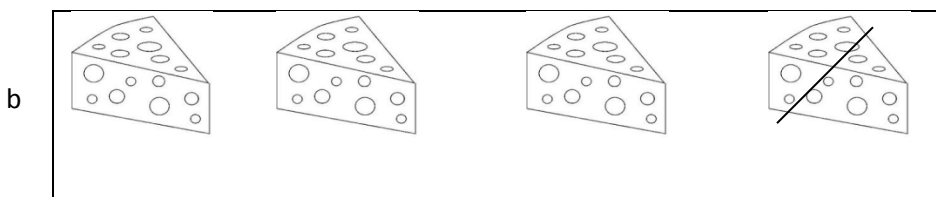
b.



Q V. Write the subtraction fact.

(2x1=2)





Answer key

Q I. Choose the correct answer

i. ₹	ii. 11	iii. -	iv. ₹15	v. 7	vi. ₹ 20
------	--------	--------	---------	------	----------

Q II.

₹ 50

₹ 100

Q III.

a. 13

b. 10

Q IV.

a. ₹14

b. ₹ 17

Q V.

a. 6-3

b. 4-1