



INDIAN SCHOOL DARSAIT
TERM II- MARCH 2019
SAMPLE PAPER
MATHEMATICS



Class: II Sec:

Date:

Name:

Max.Marks: 25

Time: 1 hr

Roll No:.....

Q.I **Fill in the blanks:**

- a) $927 = \underline{\quad} + \underline{\quad} + \underline{\quad}$.
- b) Two ₹ 1 coins make $\underline{\quad}$.
- c) $7 \times 6 = \underline{\quad} \times 7 = \underline{\quad}$.
- d) 10 more than 229 is $\underline{\quad}$.
- e) The numeral for six hundred forty is $\underline{\quad}$.

Q.II **Choose the correct answer from the brackets :**

- a) The place value of 4 in the number 439 is $\underline{\quad}$.
- (i) 40 (ii) 400 (iii) 100 (iv) 4
- b) $200 - 5 = \underline{\quad}$.
- (i) 205 (ii) 159 (iii) 210 (iv) 195
- c) Four threes can be written as $\underline{\quad}$
- (i) 3×4 (ii) 0 (iii) 4×3 (iv) 1
- d) The smallest 3 digit number is $\underline{\quad}$.
- (i) 999 (ii) 99 (iii) 111 (iv) 100
- e) ₹18 - ₹ 3
- (i) ₹21 (ii) ₹ 19 (iii) ₹ 15 (iv) ₹ 10

Q.III **Solve:**

a)

	H	T	O
	7	1	1
+		3	5

b)

	H	T	O
		6	8
-		5	4

c)


	H	T	O
		3	3
x			3

d)

	H	T	O
		5	9
-		3	7

Q. IV **Do as directed:**

a) Share equally and find how many toffees each child gets.



Each child gets _____ toffees.


b) Write the amount of money:



c) Divide:

6 divided by 3 is ____

Each group has ____ butterflies.



d) Compare the numbers with > , < or = sign:

606 ○ 606

(ii) 934 ○ 434

Q. V

Find the product :

a)

	H	T	O
		2	2
x			5

b)

	H	T	O
		8	3
x			6

Q.VI

Write the numbers in correct place and solve :

a) 400 – 8

b) 434 + 66

	H	T	O





□

	H	T	O

□

Q.VII

Look at the pictograph given below and answer the following questions.

Animal	Number
 cat	7
 dog	10
 rabbit	8
 rat	3

- a) The animal present in the largest number is _____
- b) There are _____ dogs more than rats.
- c) How many animals are there in all? _____
- d) The animal present in the smallest number is _____

Q.VIII

Read the questions carefully and solve them.

- a) Jacob had ₹ 90 with him. He bought a storybook for ₹ 42. How much money is left with him?

Ans _____

H	T	O

- b) There are 18 rooms in a building with 4 fans in each room. How many fans are there in all?

Ans _____

H	T	O