



**INDIAN SCHOOL DARSAIT**  
**HALF YEARLY EXAM, SEP 2019**  
**ENVIRONMENTAL STUDIES**



Class: II      Sec: \_\_\_

Date: 22-09-2019

Name : \_\_\_\_\_

Max.Marks: 25

Time: 1 hr

Roll No. \_\_\_\_\_

**General Instructions:**

- i. Read the question paper thoroughly and attempt your paper neatly.
- ii. Marks are indicated against each question.
- iii. All questions are compulsory.

Q. I      Choose the correct word from the help box given to fill in the blanks:-      6 x ½=3

(stomach,    exercise,    protective,    jute,    energy,    potato)

1. Food gives us \_\_\_\_\_ to work, think and play.
2. We must \_\_\_\_\_ regularly to feel fresh and keep fit.
3. \_\_\_\_\_ is the stem of the plant which grows under the ground.
4. Fibre from the \_\_\_\_\_ plant is used to make ropes and mats.
5. Our \_\_\_\_\_ is like a bag which holds the food we eat.
6. \_\_\_\_\_ food makes us healthy and strong.

Q.II      Write whether the following statements are **true** or **false**:-      5x½=2½

1. We get medicines from the cotton plant.      \_\_\_\_\_
2. All our organs need to be looked after well.      \_\_\_\_\_
3. It is better to have fresh food than to have canned food.      \_\_\_\_\_
4. We feel the pain of injection with the skin.      \_\_\_\_\_
5. Climbers have weak stem and grow along the ground.      \_\_\_\_\_

Q.III      Correct the underlined word and rewrite the sentence:-      3 x 1 = 3

1. Spinach is the flower of the plant we eat.

Ans:- \_\_\_\_\_

2. My heart helps me to think fast.

Ans:- \_\_\_\_\_  
\_\_\_\_\_

3. Thorny plants are mostly found in water.

Ans:- \_\_\_\_\_  
\_\_\_\_\_

Q.VI Give reason:-

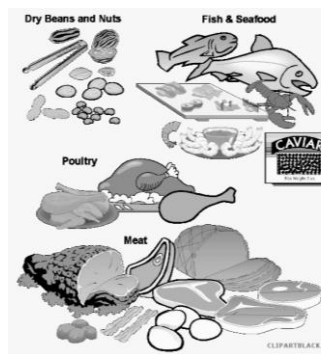
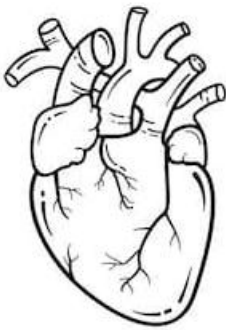
1 x 1 = 1

1. Plants are our best friends.

Ans:- \_\_\_\_\_  
\_\_\_\_\_

Q.V Identify the following pictures and write the names in the given space:-

3 x 1 = 3



\_\_\_\_\_

Q.VI Who am I?

3 x 1 = 3

1. You use me to make paper. \_\_\_\_\_

2. I am a person who eat only eggs but do not eat fish or meat. \_\_\_\_\_

3. I help you to breathe in fresh air and breathe out used air. \_\_\_\_\_

Q.VII Answer the following questions:-

1½x2=3

1. What are shrubs? Give an example.





Ans:- \_\_\_\_\_  
\_\_\_\_\_

2. What are external organs? Name any two.

Ans:- \_\_\_\_\_  
\_\_\_\_\_  
\_\_\_\_\_

Q.VIII Circle and colour the odd one :-

5x $\frac{1}{2}$ =2 $\frac{1}{2}$



Across	Down
1. Doctors listen to our heartbeat with this.	3. A protective food.
2. A cereal.	4. very small bushy plants with soft green stem.

