



INDIAN SCHOOL DARSAIT
MATHEMATICS
NUMBERS UPTO 200
PRACTICE WORKSHEET



Class: II Sec:
Name:

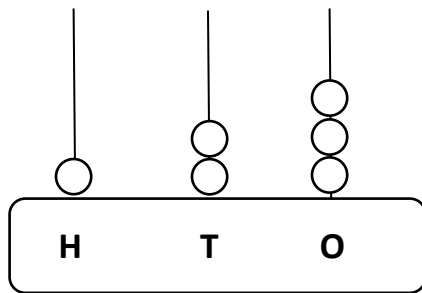
Date :.....
Roll No :

Q.I Fill in the blanks:

- a) $100 + 30 + 4 =$ _____.
- b) The smallest number among 106, 160, 116 is _____.
- c) In the word 'MATHEMATICS', H is in the _____ position and I is in the _____ position.
- d) $172 = 100 +$ _____ $+$ _____.

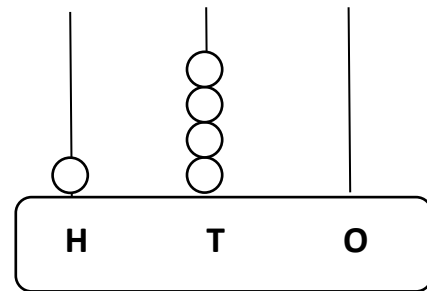
Q.II Write the numeral and number name for the number shown on the abacus.

a)



- _____

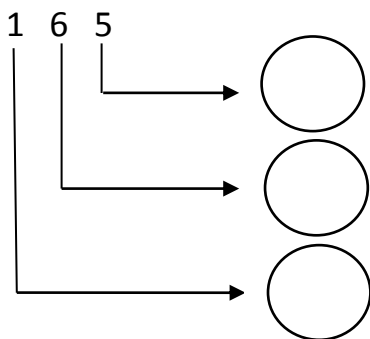
b)



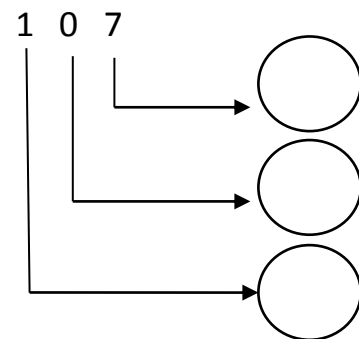
- _____

Q.III Fill up the place value:

a)



b)

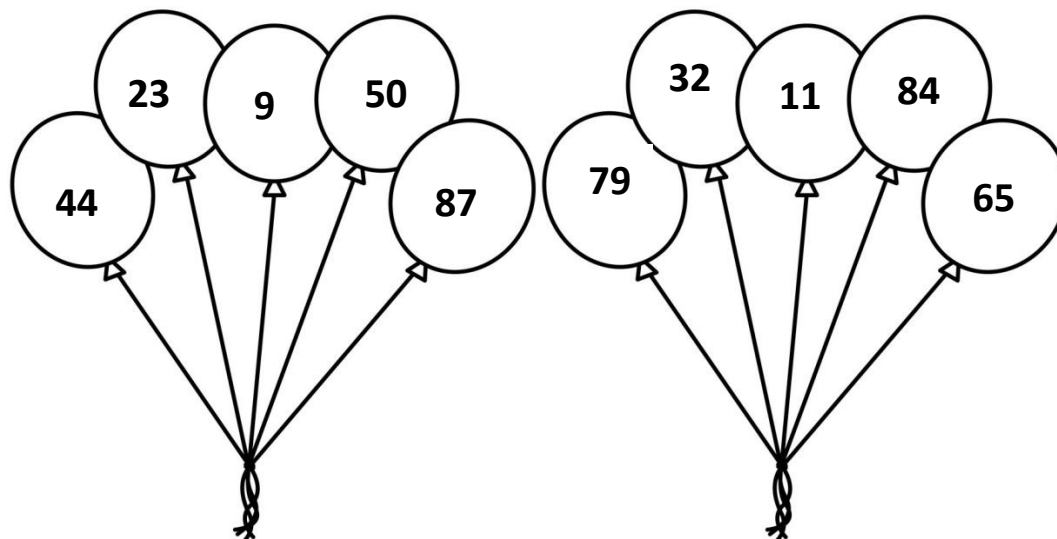


Q.IV Arrange the numbers in descending order.

a) 125, 87, 110 - _____

b) 144, 146, 143 - _____

Q.V Colour the odd numbers in yellow and the even numbers in green.



Q.VI Arrange the numbers in ascending order.

a) 181, 156, 118 - _____

b) 109, 97, 190 - _____

Q.VII Compare the numbers using <, > or = sign :

a) 198 _____ 189 (b) 140 _____ 156 (c) 127 _____ 127

Q.VIII Write the missing numbers:

139			142		144			147
-----	--	--	-----	--	-----	--	--	-----

192			195			198		200
-----	--	--	-----	--	--	-----	--	-----