



INDIAN SCHOOL DARSAIT  
MATHEMATICS  
NUMBERS UP TO 200  
REVISION WORKSHEET



Class: II Sec: ....

Date:.....

Name:.....

Roll No:.....

I. Fill in the blanks:

- a) 1 hundred + 4 tens + 6 ones = \_\_\_\_\_ .
- b) The place value of 3 in 135 is \_\_\_\_\_ .
- c) The next odd number of 81 is \_\_\_\_\_ .
- d) 1 less than 170 = \_\_\_\_\_ .
- e) The expanded form of 159 is \_\_\_\_\_ .
- f) The number that comes after 143 is \_\_\_\_\_ .


II. Write the numeral for the given number names :

- a) One hundred sixty six - \_\_\_\_\_
- b) Two hundred - \_\_\_\_\_
- c) One hundred eighteen - \_\_\_\_\_

III. Write the number names for the following :

- a) 190 - \_\_\_\_\_
- b) 114 - \_\_\_\_\_
- c) 106 - \_\_\_\_\_

IV. Pair the following to find if they are odd or even:

- a)  \_\_\_\_\_



V. Compare the numbers with <, > or = sign :

a) 111 \_\_\_\_\_ 110

b) 106 \_\_\_\_\_ 116

c) 189 \_\_\_\_\_ 171

d) 150 \_\_\_\_\_ 150

VI. Arrange in ascending order:

a) 199, 109, 179 - \_\_\_\_\_

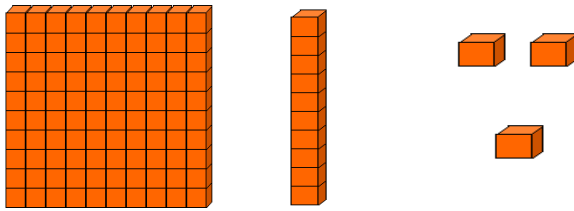
b) 125, 45, 112 - \_\_\_\_\_

VII. Arrange in descending order:

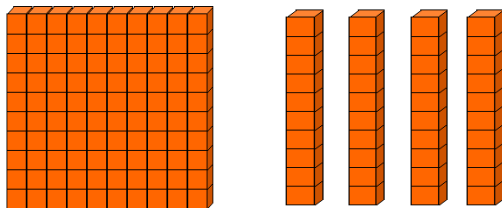
a) 152, 100, 149 - \_\_\_\_\_

b) 110, 114, 115 - \_\_\_\_\_

VIII. Form the numbers :



a) \_\_\_\_\_ hundred + \_\_\_\_\_ tens + \_\_\_\_\_ ones = \_\_\_\_\_



b) \_\_\_\_\_ hundred + \_\_\_\_\_ tens + \_\_\_\_\_ ones = \_\_\_\_\_