



INDIAN SCHOOL DARSAIT
SAMPLE PAPER-SEPTEMBER 2019
MATHEMATICS



Class: II Sec : _____

Date: _____





Name : _____

Roll No. _____

Q.I Fill in the blanks:

- a) The answer in subtraction is called _____.
- b) A cylinder has one curved face and _____ flat faces.
- c) 4 taken away from 74 is _____.
- d) 8 tens + 15 ones = _____ tens + 5 ones
- e) $67+23 = \text{_____} +67$
- f) $48 - \square = 47$

Q.II Match the following shapes to the correct objects:

- | | |
|---------------|--|
| (i) sphere | a)  |
| (ii) cylinder | b)  |
| (iii) cuboid | c)  |
| (iv) cone | d)  |

(i) _____ (ii) _____ (iii) _____ (iv) _____

Q.III

Choose the correct answer:

- a) A sphere has _____ curved face.
 (i) 1 (ii) 0 (iii) 2 (iv) 3
- b) Solid shapes with only curved faces can roll but not _____.
 (i) slide (ii) roll (iii) none of the above (iv) both
- c) _____ + 90 = 100
 (i) 90 (ii) 10 (iii) 0 (iv) 20
- d) A birthday cap represents the shape of a _____.
 (i) cylinder (ii) cone (iii) circle (iv) cube
- e) Subtracting a number from itself, gives _____.
 (i) same number (ii) 0 (iii) next number (iv) 1
- f) 12 less than 37 is _____.
 (i) 49 (ii) 25 (iii) 5 (iv) 52

Q.IV

Add / Subtract:

a)

	T	O
	2	7
+	2	0

b)

	T	O
	6	5
-	3	2

c)

	T	O
	3	1
		3
+	2	4

d)

	T	O
	7	8
-	4	3

e)

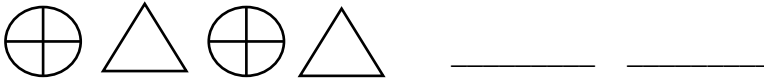
	T	O
	8	9
-	5	6

Q.V

Complete the pattern:

a) 33 , 43 , 53 , _____ , _____

b) 75 , 70 , 65 , _____ , 55

c) 

Q.VI

Find the sum:

a)

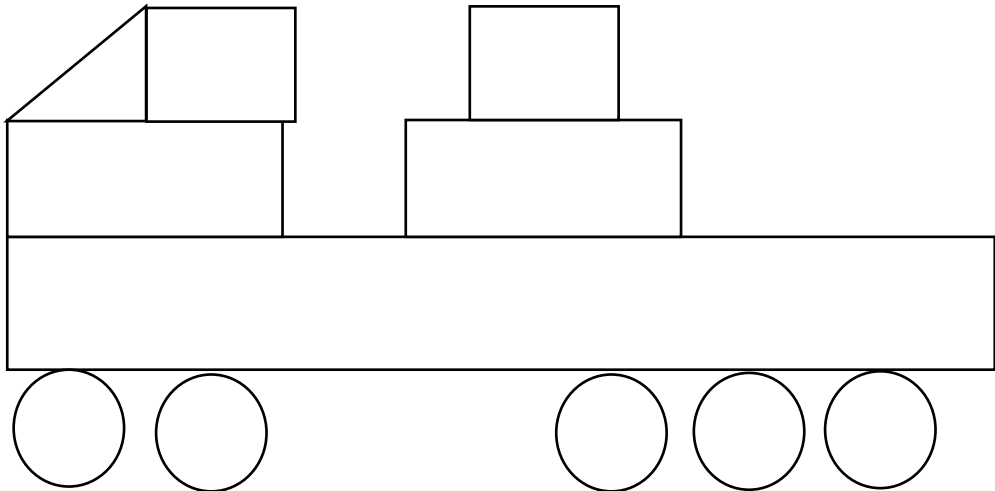
	T	O
	5	6
+	3	7

b)

	T	O
	7	8
+	1	4

Q.VII

Count and write the number of standing lines, sleeping lines and slanting lines:

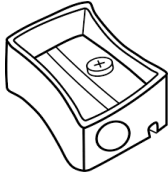


a) Standing lines _____ b) Sleeping lines _____

c) Slanting lines _____

Q.VIII

Colour the objects that can only slide:



Q.IX

Read the questions carefully and solve them:

- a) Rita had 32 stamps. Her mother gave her 10 stamps and her friend Tina gave her 15 more. How many stamps does she have now?

	T	O
<input type="text"/>		

Ans : _____

- b) There are 47 baskets of red roses and 25 baskets of white roses. How many baskets of roses are there in all?

	T	O
<input type="text"/>		

Ans : _____