



INDIAN SCHOOL DARSAIT
MATHEMATICS
ENRICHMENT ACTIVITY
HANDLING DATA



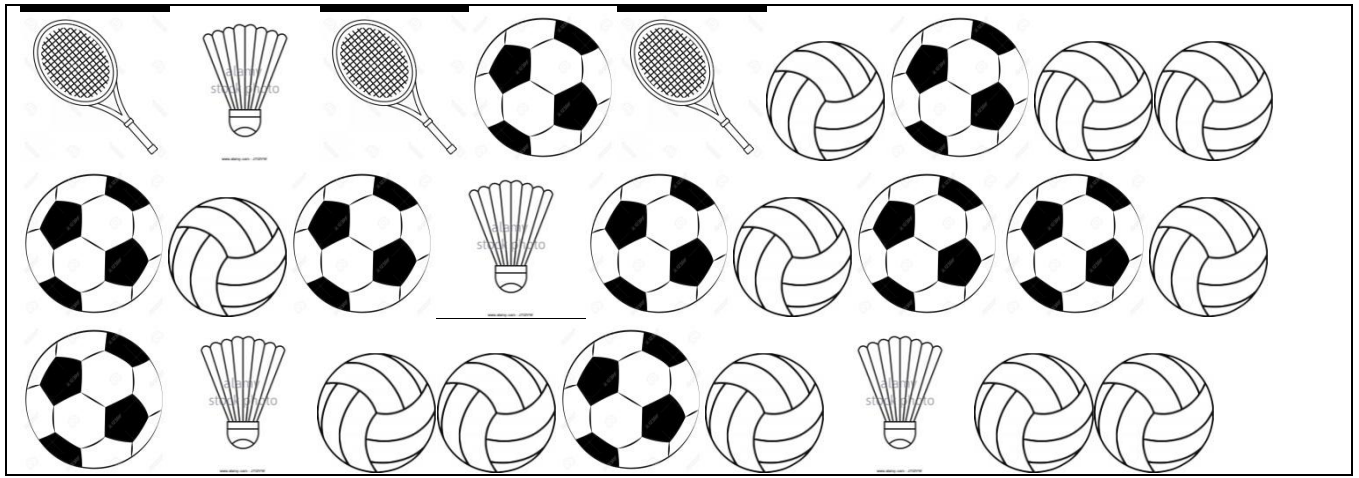
Class IV Sec ____

Date : _____

Name : _____

Roll no: _____

a) Rahul was trying to find out from his classmates the most popular choice for games. Help him record their answers using tally marks.



Enter the data in the following table and answer the following questions.





Games	Tally marks	Number
Football		
Shuttle		
Tennis		
Volleyball		

1) How many children like to play football ? _____

2) How many more children like to play volleyball than tennis ? _____

3) Most of the children are fond of which game? _____

b) Below is the data on the insects seen at Noida park. Complete the table and answer the questions given below.

Insects	Tally marks	Number
		
		
		
		

- 1) How many more ants were there than bugs? _____
- 2) How many insects were seen in the park altogether? _____
- 3) How many more butterflies were seen than grasshoppers? _____
- 4) Which insect is seen the most? _____